

Class:2<sup>nd</sup>

Sub:SSt

Q1 Answer these questions:

1. Write the name of main religions in India ?
2. How does people celebrate holi?
3. Write 5- 10 lines on your holy book?
4. Make greeting cards for any two festivals that you like.
5. What will happen if we work all the time?

Q2. Identify the following cartoon characters.




1. ....

2. ....

3. ....

4. ....

Q3. Write 10-15 line on this important National symbol.



# ARMY GOODWILL HIGH SCHOOL HANZIK, SHARIEFABAD

## Assignment

Class: - 2<sup>th</sup>

Sub: - Computer









(1) Draw the main parts of computer and label them

(2) With the help of your textbook answer the following questions










- (a) Write the main parts of computer?
- (b) What does CPU stand for?
- (c) What does DVD stand for?
- (d) What is use of scanner?
- (e) What do you mean by USB port?
- (f) Write name of three storage?
- (g) Computer works in three steps. Write the name of these

(3) Draw the storage devices and write their names

(4) Write the I for input devices and O for output devices

 Pen Drive <input type="checkbox"/>	 Headphone <input type="checkbox"/>	 Joystick <input type="checkbox"/>	 Monitor <input type="checkbox"/>
 Scanner <input type="checkbox"/>	 Keyboard <input type="checkbox"/>	 CD <input type="checkbox"/>	 Light Pen <input type="checkbox"/>

(5) In following activities mark input as I, Processing as P and output as O


Making an omelette	 <input type="checkbox"/>	 <input type="checkbox"/>	 <input type="checkbox"/>
Making juice	 <input type="checkbox"/>	 <input type="checkbox"/>	 <input type="checkbox"/>
Making ice cubes	 <input type="checkbox"/>	 <input type="checkbox"/>	 <input type="checkbox"/>

Work Sheet for class 2nd

- Q1 Make as many as possible 3-digit numbers with the digits given below.
  - a. 9, 5 and 7
  - b. 6, 2 and 4
- Q2

Match the following.

These numbers show the weight of animals. Match these to the animals.



My weight is 17 more than 200.

Bear




My weight has '9' in the tens place.

Tiger



My weight is a two digit number.

Chimpanzee




My weight has '0' in the ones place.


Lion


Q3

Help postman Hamant deliver these letters to the right homes.




My number is 1 less than 490.







My number is 5  
more than 320.



My number is  
less than 1000.



My number is 1  
more than 327.




My number is 5 more than 320.

Mr. Kapoor  
House No. 981




My number is less than 1000.

Mr. Arora  
House No. 489



My number is 1 more than 327.

Mrs. Arya  
House No. 325



Arrange the numbers in descending order.

188, 156, 196,  
143, 251

• Q7

Colour the greatest number pink.

a.	269	249	296
b.	174	138	152
c.	586	579	497

• Q8

Colour the smallest number red.

a.	654	925	428
b.	832	459	864
c.	572	869	579


• Q9

Arrange the cherries in descending order.




• Q10

Fill in numbers which are more than the given number in ascending order.



• Q11

Arrange the penguins in ascending order.





Q12 Identify the number.

a. I am the largest two digit number. \_\_\_\_\_

b. I am the smallest two digit number. \_\_\_\_\_

c. I am the largest three digit number. \_\_\_\_\_